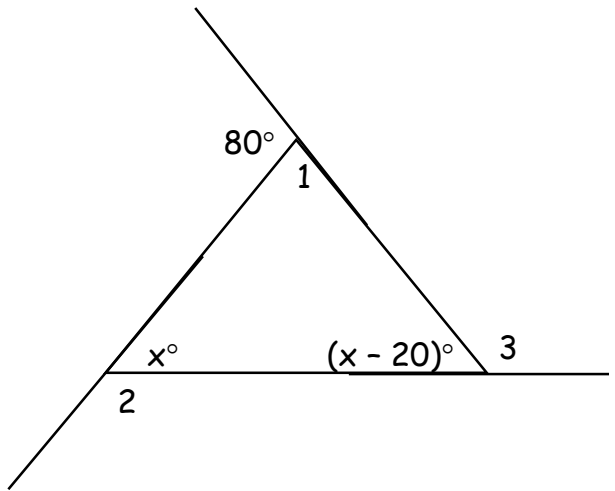


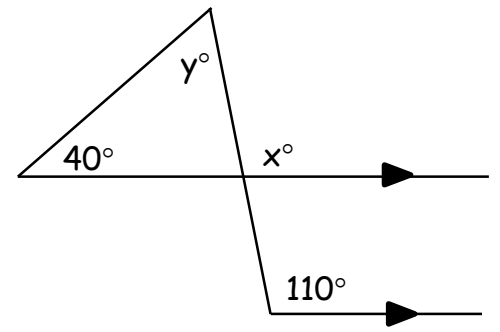
3.4 Triangle Angle Theorem Worksheet

1)



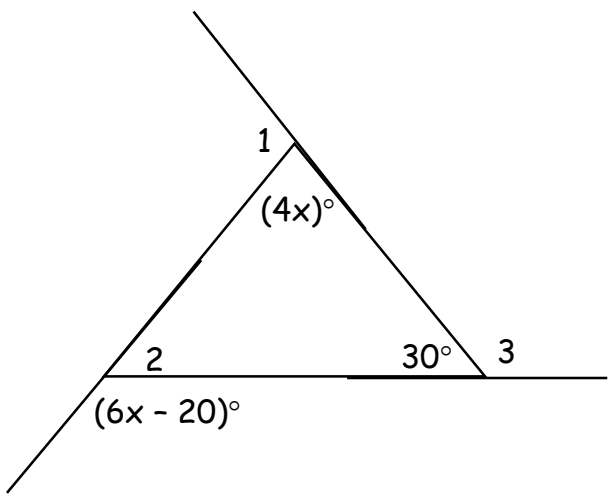
Find the following:
 $x =$ _____
 $m\angle 1 =$ _____
 $m\angle 2 =$ _____
 $m\angle 3 =$ _____

3)



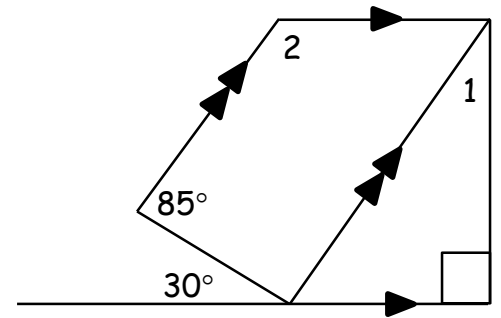
Find the following:
 $x =$ _____
 $y =$ _____

2)



Find the following:
 $x =$ _____
 $m\angle 1 =$ _____
 $m\angle 2 =$ _____
 $m\angle 3 =$ _____

4)



Find the following:
 $m\angle 1 =$ _____
 $m\angle 2 =$ _____